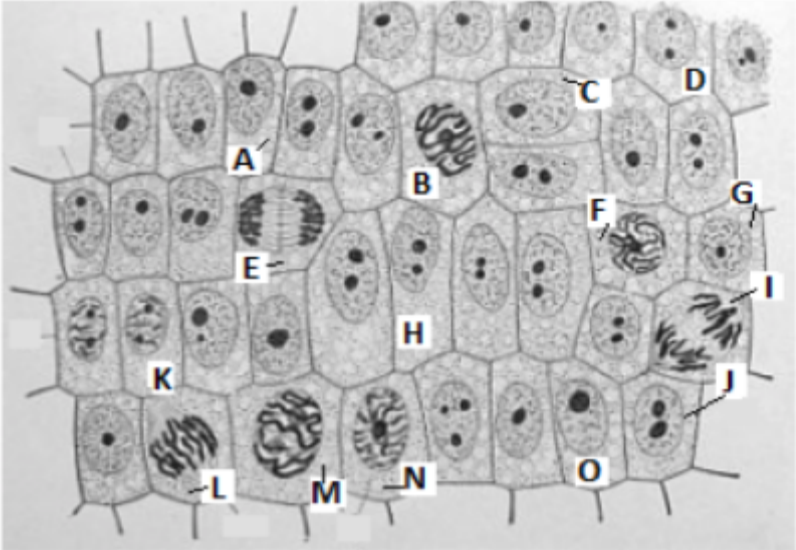


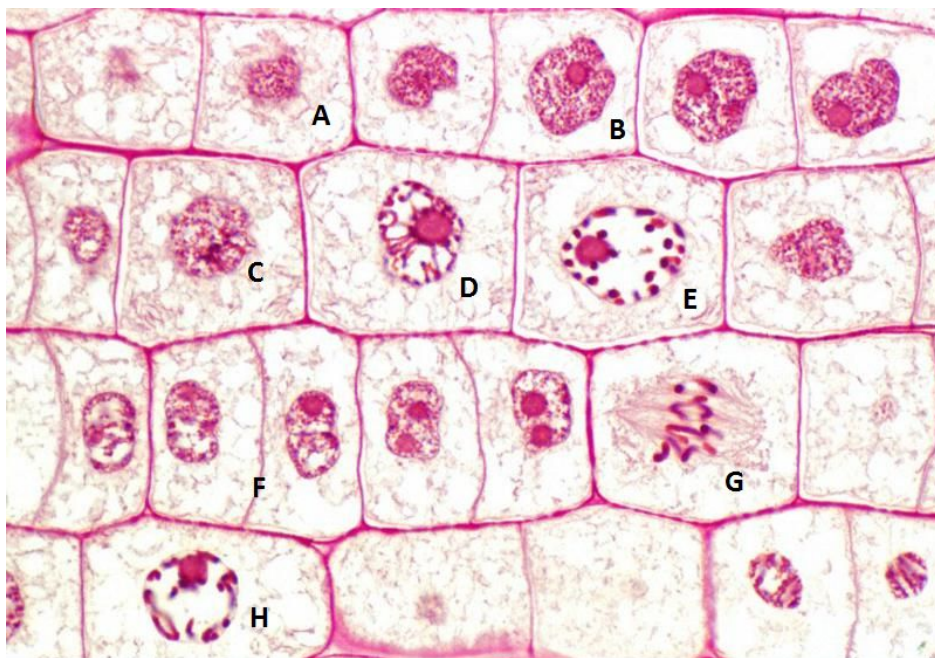
Feuille de travail – Les phases de mitose

Nommez la phase de la mitose observée dans les cellules suivantes. Aussi nommer le type de cellule (animale ou végétale) dans les diagrammes.

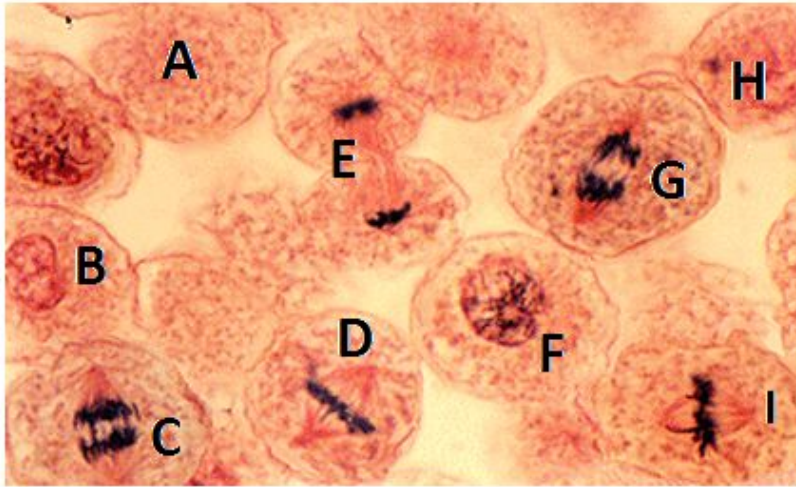


A black and white micrograph showing a grid of plant cells. Each cell is roughly rectangular with a thick cell wall. Various stages of mitosis are visible and labeled with letters A through O. Labels A, B, C, D, E, F, G, H, I, J, K, L, M, N, and O point to different cells showing different stages of chromosome condensation, spindle formation, and cell division.

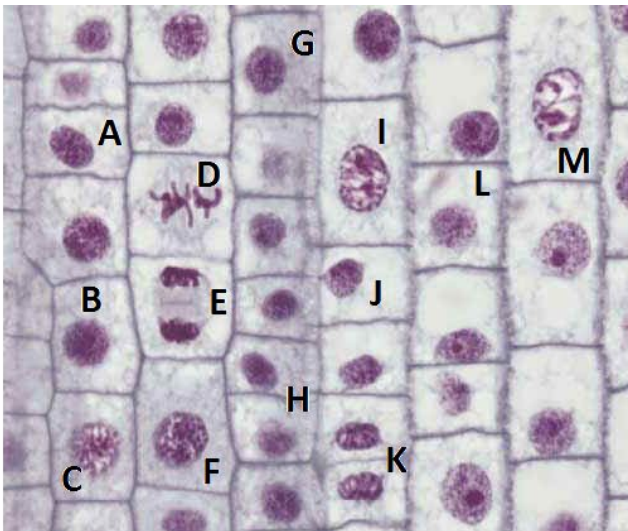
A _____
B _____
C _____
D _____
E _____
F _____
G _____
H _____
I _____
J _____
K _____
L _____
M _____
N _____
O _____



- A _____
B _____
C _____
D _____
E _____
F _____
G _____
H _____



- A _____
- B _____
- C _____
- D _____
- E _____
- F _____
- G _____
- H _____
- I _____



- | | |
|---------|---------|
| A _____ | H _____ |
| B _____ | I _____ |
| C _____ | J _____ |
| D _____ | K _____ |
| E _____ | L _____ |
| F _____ | M _____ |
| G _____ | |